







Count how many turtles are in each square.

Write the number in the box!

 <p>A square containing four cartoon turtles. Two are in the top row and two are in the bottom row.</p>	<input type="text"/>	 <p>A square containing four cartoon turtles. Two are in the top row and two are in the bottom row.</p>	<input type="text"/>
 <p>A square containing five cartoon turtles. Two are in the top row and three are in the bottom row.</p>	<input type="text"/>	 <p>A square containing one cartoon turtle in the center.</p>	<input type="text"/>
 <p>A square containing six cartoon turtles. One is in the top row, two are in the middle row, and three are in the bottom row.</p>	<input type="text"/>	 <p>A square containing two cartoon turtles. One is in the top row and one is in the bottom row.</p>	<input type="text"/>

Thanks for visiting the virtual Auburn Public Library!